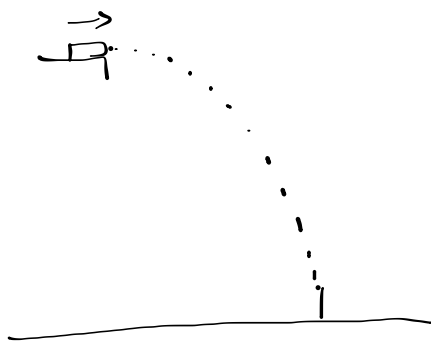


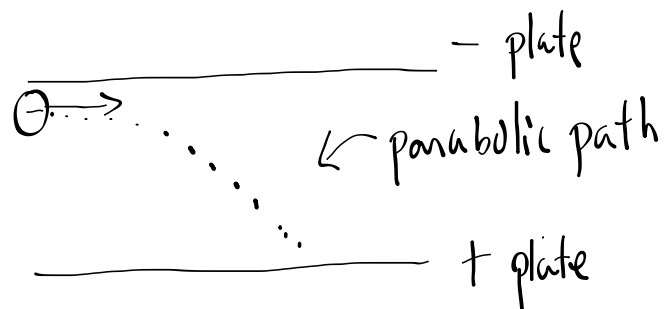
Projectile Motion

A projectile is any body that is given an initial velocity and follows a path determined by the effect of a gravitational field and by air resistance.

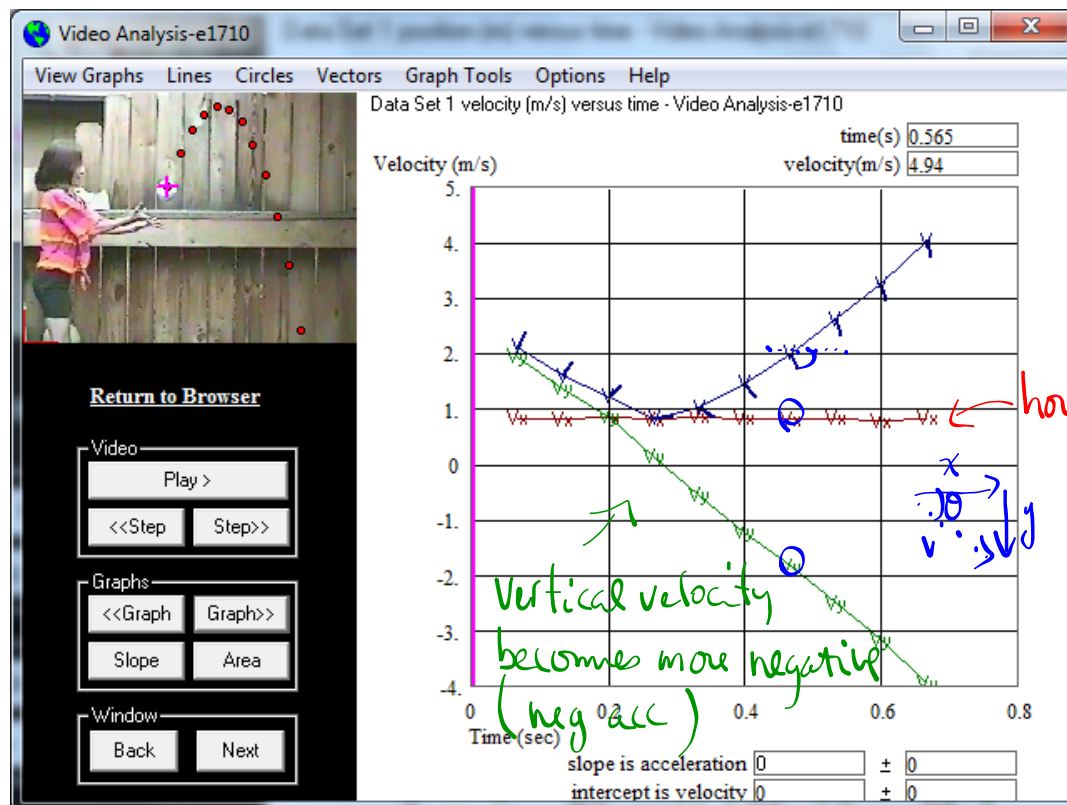
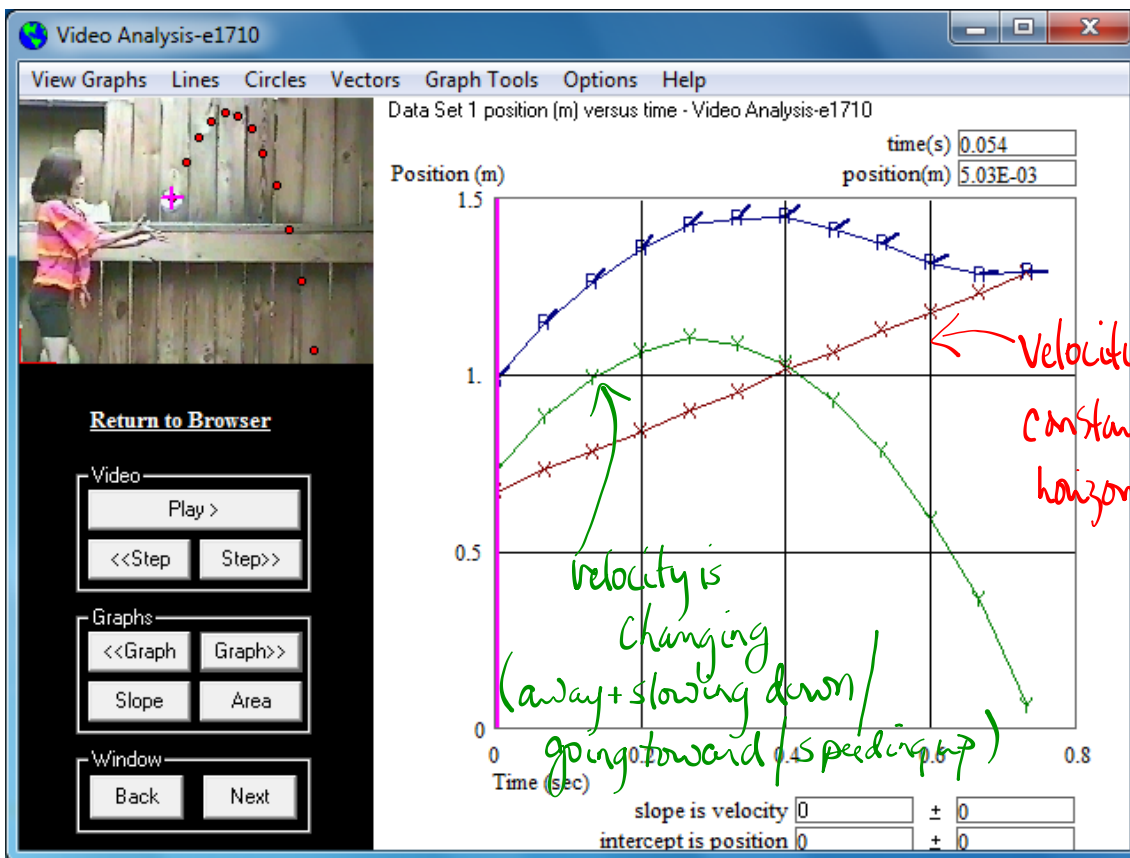
In the absence of air resistance, the path of the projectile is parabolic.

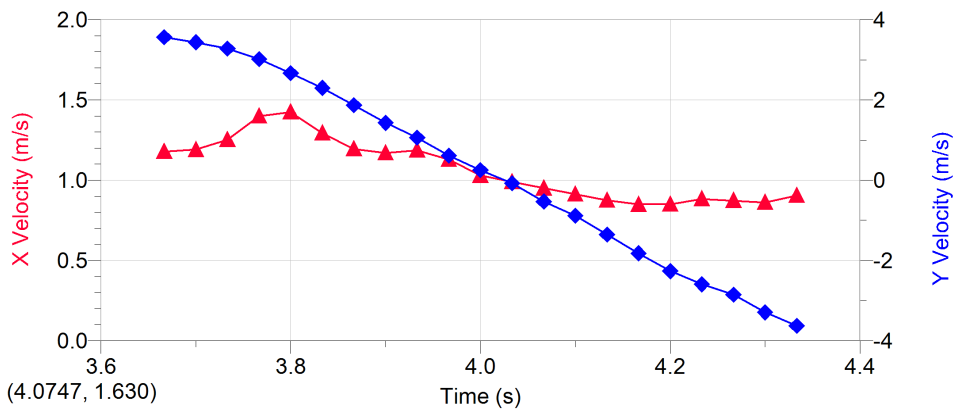
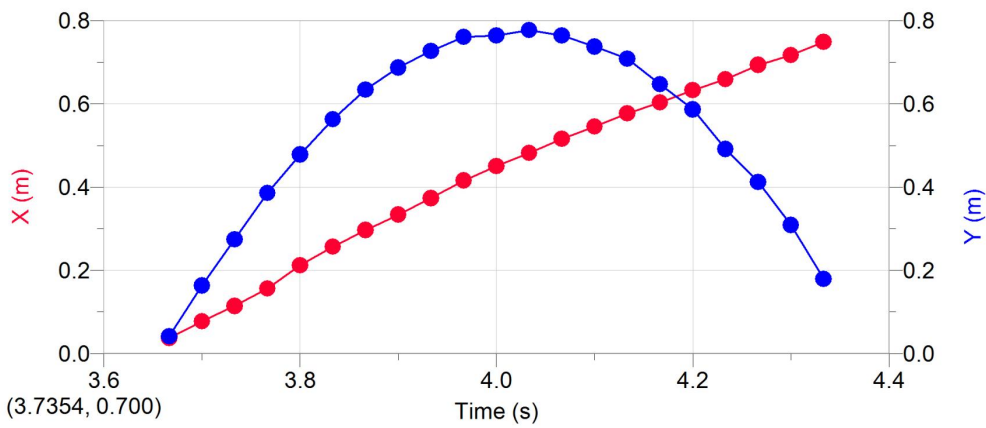
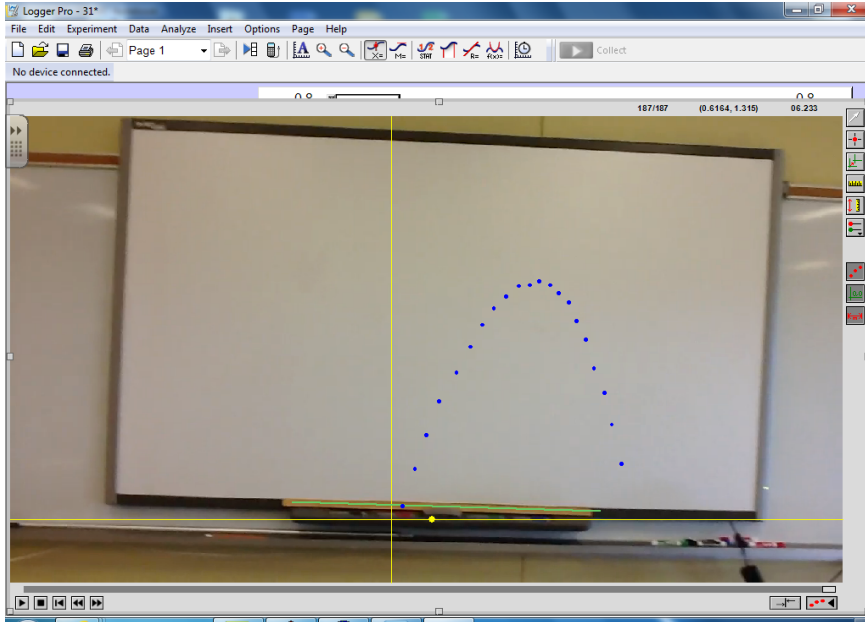


Parabolic motion results whenever an object is moving under the action of a force which is constant in both magnitude and direction. (i.e. force of gravity)



* In a uniform field, the horizontal and vertical components of velocity are independent.





For projectile motion:

horizontally, the velocity is constant: $v = \frac{\Delta d}{\Delta t}$

vertically, there is constant acceleration ($a = -9.81 \text{ m/s}^2$)

$$a = \frac{\Delta v}{\Delta t}$$

and "suvat" equations

$$* \textcircled{1} \quad v = u + at$$

$$* \textcircled{2} \quad s = \left(\frac{u+v}{2} \right) t$$

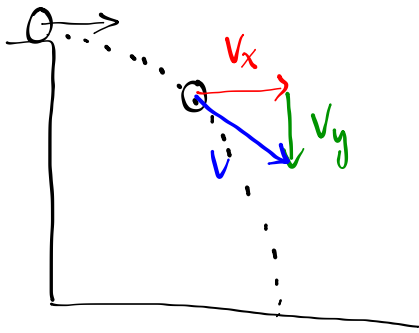
$$* \textcircled{3} \quad v^2 = u^2 + 2as$$

$$* \textcircled{4} \quad s = ut + \frac{1}{2}at^2$$

$$\textcircled{5} \quad s = vt - \frac{1}{2}at^2$$

Example

An object is launched horizontally with a speed of 8.0 ms^{-1} from the edge of a cliff. What is the velocity of the object 1.2 s after launch?



Horizontally, the velocity stays constant so

$$v_x = 8.0 \text{ ms}^{-1}$$

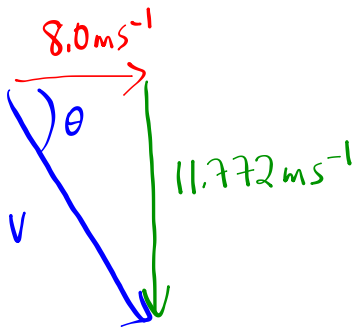
Vertically, there is constant acceleration:

$$u = 0$$

$$a = -9.81 \text{ ms}^{-2}$$

$$t = 1.2 \text{ s}$$

$$v = ?$$



$$v^2 = (8.0)^2 + (11.772)^2$$

$$v = 14 \text{ ms}^{-1}$$

magnitude

$$v = u + at$$

$$v = 0 + (-9.81 \text{ ms}^{-2})(1.2 \text{ s})$$

$$v = -11.772 \text{ ms}^{-1}$$

$$\tan \theta = \frac{11.772}{8.0}$$

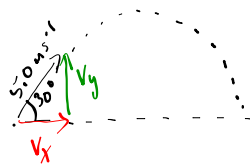
$$\theta = 56^\circ \leftarrow \text{direction}$$

The velocity of the object is 14 ms^{-1} , 56° below horizontal.

Example

An object is thrown with a speed of 5.0 ms^{-1} at an angle of 30° upwards. Neglecting air resistance, calculate:

- the maximum height reached
- the time taken to reach max height
- the time to return to the initial level



Find the horizontal (v_x) and vertical (v_y) components of the initial velocity.

$$v_x = v \cos \theta = (5.0 \text{ ms}^{-1})(\cos 30^\circ) = 4.3 \text{ ms}^{-1} \leftarrow \text{constant}$$

$$v_y = v \sin \theta = (5.0 \text{ ms}^{-1})(\sin 30^\circ) = 2.5 \text{ ms}^{-1} \leftarrow \text{changing.}$$

a) max height:

$$u = 2.5 \text{ ms}^{-1}$$

$$v = 0 \text{ (at max height)}$$

$$a = -9.81 \text{ ms}^{-2}$$

$$s = ?$$

$$v^2 = u^2 + 2as$$

$$v^2 - u^2 = 2as$$

$$s = \frac{v^2 - u^2}{2a}$$

$$s = \frac{-u^2}{2a}$$

$$s = \frac{-(2.5)^2}{2(-9.81)}$$

$$s = 0.32 \text{ m}$$

b) how long to reach max height?

$$v = 0$$

$$u = 2.5 \text{ ms}^{-1}$$

$$s = 0.32 \text{ m}$$

$$a = -9.81 \text{ ms}^{-2}$$

$$t = ?$$

$$a = \frac{\Delta v}{t}$$

$$t = \frac{\Delta v}{a}$$

$$t = \frac{v - u}{a}$$

$$t = \frac{0 - 2.5 \text{ ms}^{-1}}{-9.81 \text{ ms}^{-2}}$$

$$t = 0.25 \text{ s}$$

c) time to return to

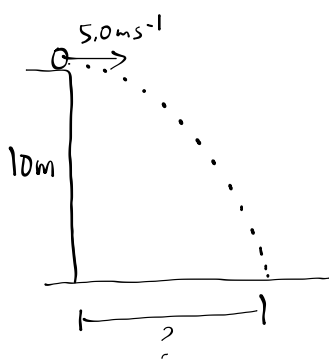
same level. is double the time to reach max height due to the symmetry.

$$2(0.25 \text{ s}) = 0.51 \text{ s}$$

Example

A ball is thrown with a speed of 5.0 ms^{-1} horizontally from a cliff 10 m high. Neglecting air resistance, determine:

- a) the time for the ball to reach the ground.
- b) the distance from the cliff where the ball lands.
- c) the velocity just before it lands.



a) time to reach the ground (vertical motion is what's important)

$$u = 0$$

$$s = -10 \text{ m}$$

$$a = -9.81 \text{ ms}^{-2}$$

$$t = ?$$

$$s = ut + \frac{1}{2}at^2$$

$$s = \frac{1}{2}at^2$$

$$t^2 = \frac{2s}{a}$$

$$t = \sqrt{\frac{2s}{a}}$$

$$t = \sqrt{\frac{2(-10 \text{ m})}{-9.81 \text{ ms}^{-2}}}$$

$$t = 1.4 \text{ s}$$

b) how far horizontally? (velocity is constant)

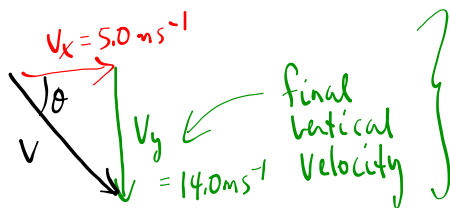
$$v = \frac{\Delta d}{t}$$

$$\Delta d = vt$$

$$\Delta d = (5.0 \text{ ms}^{-1})(1.4 \text{ s})$$

$$\Delta d = 7.1 \text{ m}$$

c) velocity just before landing:



15 ms^{-1} 70° below the horizontal

$$u = 0$$

$$v = ?$$

$$t = 1.4 \text{ s}$$

$$a = -9.81 \text{ ms}^{-2}$$

$$v = u + at$$

$$v = 0 + (-9.81 \text{ ms}^{-2})(1.4 \text{ s})$$

$$v = -14.0 \text{ ms}^{-1}$$

